

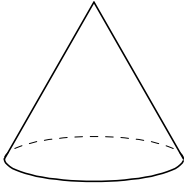
Name: _____

Date: _____

Geometry - Shapes

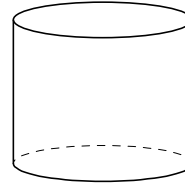
Identify each shape by marking the name that best describes it:

1)



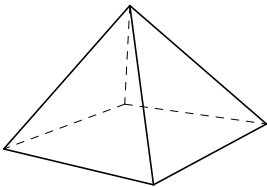
- A. Pyramid
- B. Cone
- C. Cube
- D. Sphere

2)



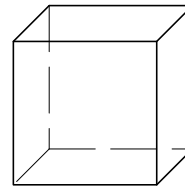
- A. Cube
- B. Cylinder
- C. Cone
- D. Sphere

3)



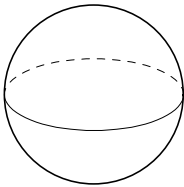
- A. Cylinder
- B. Pyramid
- C. Sphere
- D. Cone

4)



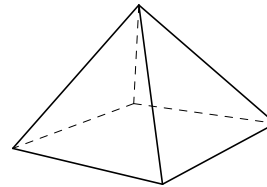
- A. Pyramid
- B. Cone
- C. Cube
- D. Sphere

5)



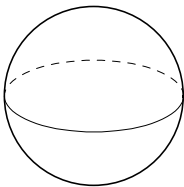
- A. Sphere
- B. Cone
- C. Cube
- D. Cylinder

6)



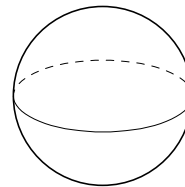
- A. Sphere
- B. Cylinder
- C. Pyramid
- D. Cube

7)



- A. Sphere
- B. Cone
- C. Pyramid
- D. Cylinder

8)



- A. Cylinder
- B. Sphere
- C. Cone
- D. Pyramid

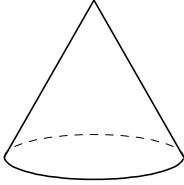
Name: _____

Date: _____

Geometry - Shapes

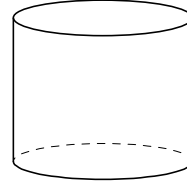
Identify each shape by marking the name that best describes it:

1)



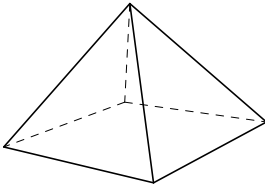
- A. Pyramid C. Cube
 B. Cone D. Sphere

2)



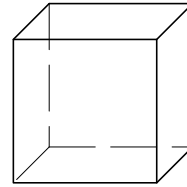
- A. Cube C. Cone
 B. Cylinder D. Sphere

3)



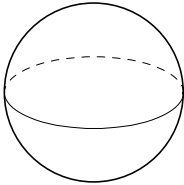
- A. Cylinder C. Sphere
 B. Pyramid D. Cone

4)



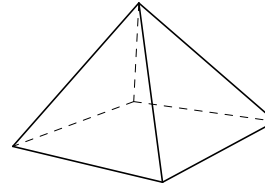
- A. Pyramid C. Cube
B. Cone D. Sphere

5)



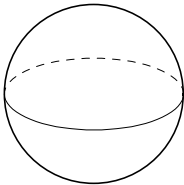
- A. Sphere C. Cube
B. Cone D. Cylinder

6)



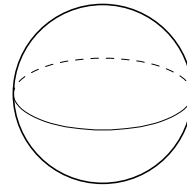
- A. Sphere C. Pyramid
B. Cylinder D. Cube

7)



- A. Sphere C. Pyramid
B. Cone D. Cylinder

8)



- A. Cylinder C. Cone
 B. Sphere D. Pyramid